


Hi Year 2! This week for Maths. we are focussing on time. On the website there are some worksheets to have a go at for telling the time. You can look at the clock on the screen and write down your time. If you're feeling inventive maybe you could even make your own clock; that would be amazing! Below are some extra Maths. challenges for you too. Give them a go and remember; the big hand is the minute hand and, and the small hand is the hour hand. 😊


Which of these clock faces shows a time between 5 o'clock and 7 o'clock?



Jack says, 'There isn't any point in having a minute hand on a clock because I can still tell the time without it.'

Do you agree with him?

Explain your answer.



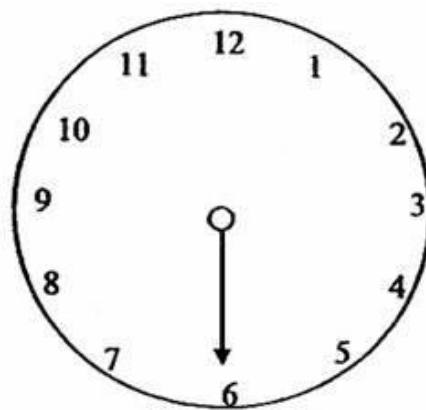
## Word problem challenges

Moonface from the Magic Faraway Tree went to see Saucepan Man at half past 2. What number would the hour (small) hand be on?

Saucepan Man was supposed to meet his friends at 5 o'clock but he didn't hear them properly and was 2 hours late! What time did he finally show up?

Silky made a potion. She started it at half past 3 and it was finished at quarter past 4. How long did it take to make?

Rick's clock is broken! Which hand is he missing? What could the time be?



Now you could have a go at writing some of your own time word problems! Use any characters you like!