

Addition number sentences.

Today for Maths solve these number sentences using *practical resources*. In the class-room we may have used counting bears, counters or cubes. You can use whatever you have on hand. Sweets? Toys? Lego?

$5 + 3 =$

$7 + 6 =$



$2 + 9 =$

$1 + 8 =$



$12 + 3 =$

$4 + 6 =$

Now try these- using *pictures*.

 $+$  $= ?$

 $+$  $= ?$

 $+$  $= ?$

This last set of questions you can work out using whatever method you *chose*.

$15 + 5 =$

$13 + 6 =$

$11 + 4 =$

$9 + 9 =$

$8 + 11 =$

$6 + 12 =$