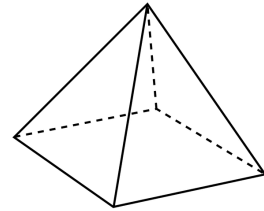
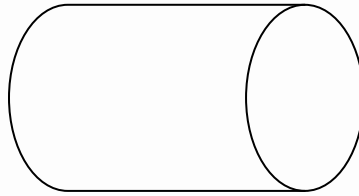



Shapes

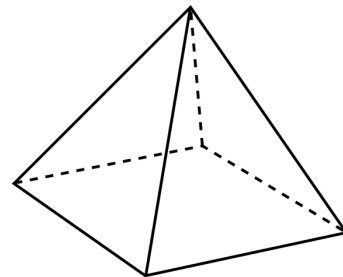
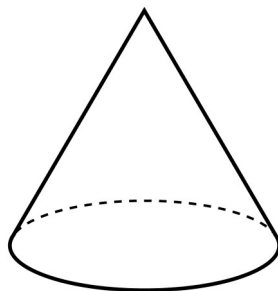
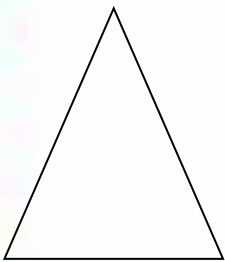
L0: To solve problems using reasoning.

John draws the shape of his room. It has 12 edges and 6 faces. What shape does John draw?



Which shape is a triangle?

How do you know it is a triangle?



Tim wants to build a roof. Is a sphere a good shape to use for a roof? _____

Why? _____
